


naam _____

GETALLENKENNIS

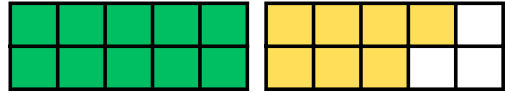
tientalligheid en plaatswaarde




vul de tabel in en noteer het getal.




T	E

 = 

T	E

 = 

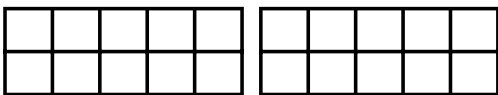
T	E

 = 

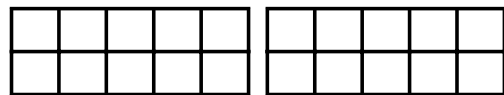
T	E

 = 

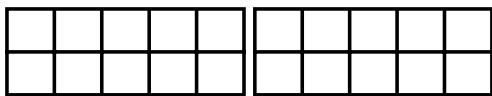
kleur het getalbeeld en vul de tabel in.



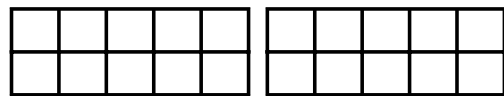
T	E

 = 

T	E

 = 

T	E

 = 

T	E

 =

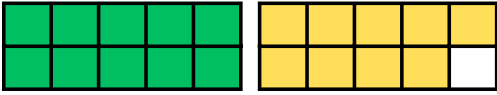
naam _____

GETALLENKENNIS

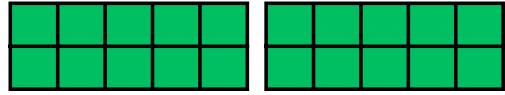
tientalligheid en plaatswaarde




vul de tabel in en noteer het getal.




T	E

 = 

T	E

 = 

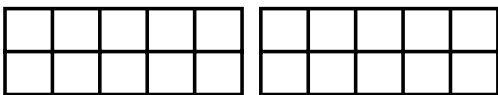
T	E

 = 

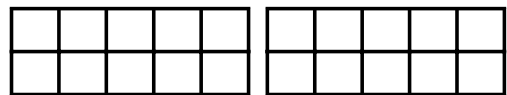
T	E

 = 

kleur het getalbeeld en vul de tabel in.



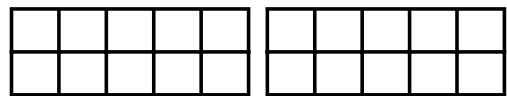
T	E

 = 

T	E

 = 

T	E

 = 

T	E

 =

naam _____

GETALLENKENNIS

tientalligheid en plaatswaarde



Kleur er 10. omkring de 10.
Vul het schema in en schrijf het getal.

T	E	=

T	E	=

T	E	=

T	E	=

T	E	=

T	E	=